



INDIAN SCHOOL NIZWA - WORKSHEET

MATHEMATICS CH-9 DATA HANDLING

Name: _____

Date: _____

Class: I Sec: ____

1. Given below are objects that you see in your home. Count the number of letters in each object.

T A B L E



C H A I R



F A N



W I N D O W



C O M P U T E R



L I G H T



How many objects have 5 letters



How many objects have 3 letters



How many objects have 7 letters



How many times letter **A** comes in all the objects taken together




How many times letter **M** comes in all the objects taken together



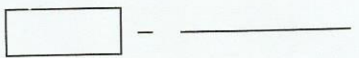



INDIAN SCHOOL NIZWA - WORKSHEET



Count the shapes in the above picture

Name the shape that occurs most _____



Name the shape that occurs least _____